

Şekil Sayı Eşleştirme

×

= 2

→

= 4

△

= 3

☆

= 1

□

= 9

+

= 8

○

= 5

▽

= 0

⬠

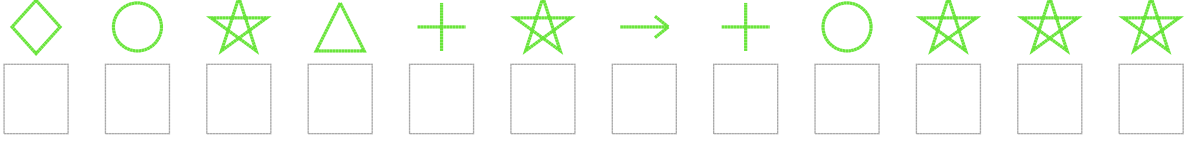
= 7

◇

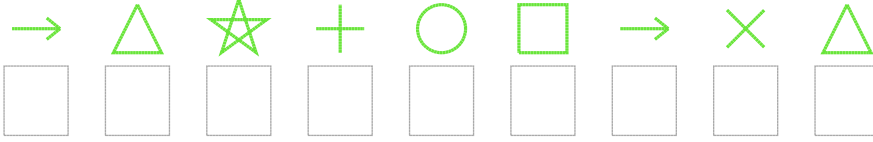
= 6

Aşağıdaki uzun şifreleri hatasız çözerek altlarına yazın:

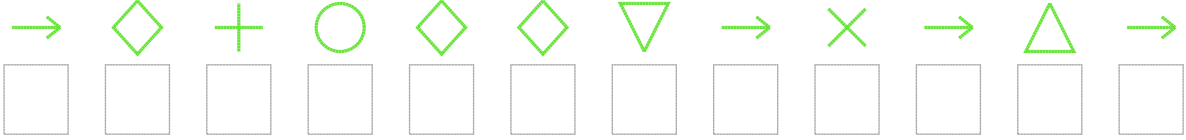
1. Şifre



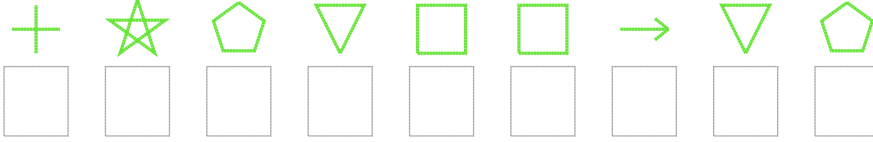
2. Şifre



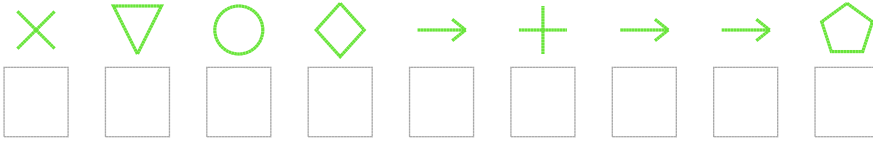
3. Şifre



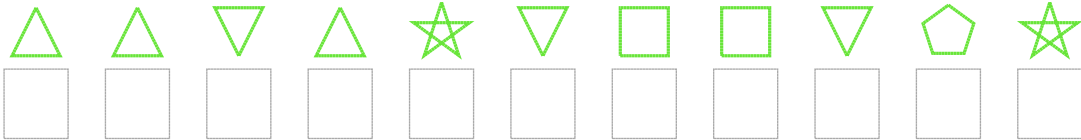
4. Şifre



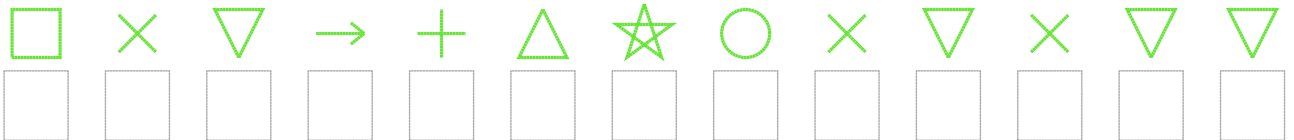
5. Şifre



6. Şifre



7. Şifre



□ BONUS: 4. ve 6. şifrenin ilk rakamının toplamı kaçtır?

Cevap Anahtarı

1. Şifre: 651381485111

2. Şifre: 431859423

3. Şifre: 468566042434

4. Şifre: 817099407

5. Şifre: 205648447

6. Şifre: 33031099071

7. Şifre: 9204831520200

□ Bonus Soru Cevabı: 11